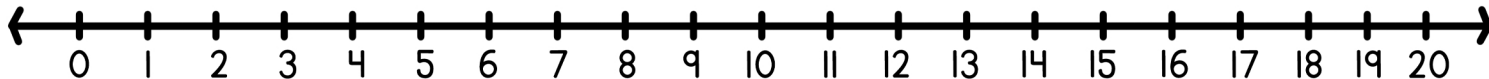
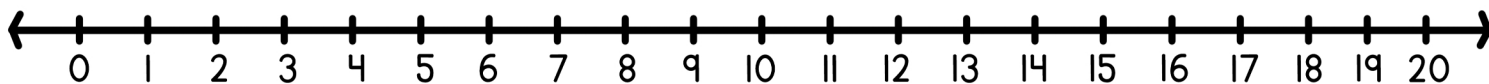


Solve each word problem using the number line and write the equation below.



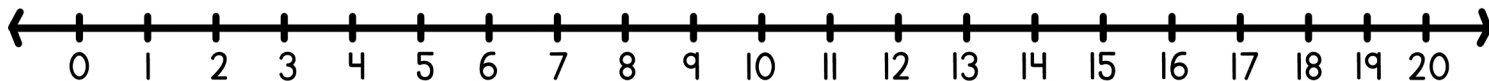
Aiden had 20 ice cream cones, but he dropped 3. How many ice cream cones does Aiden have left?

$$\square - \square = \square$$



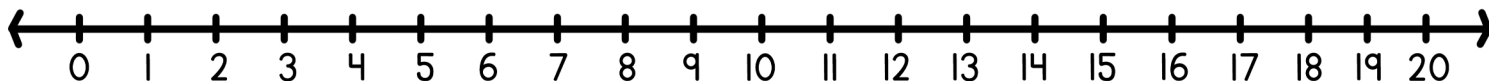
Ethan had 16 books, but he lent 4 to his friend. How many books does Ethan have now?

$$\square - \square = \square$$



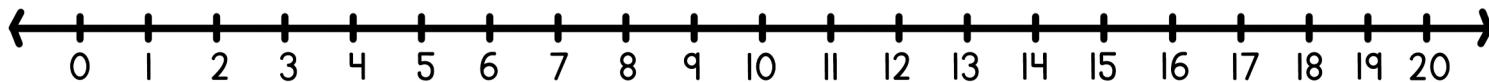
Mia had 19 soccer balls, but she gave 5 to her neighbor. How many soccer balls does Mia have left?

$$\square - \square = \square$$



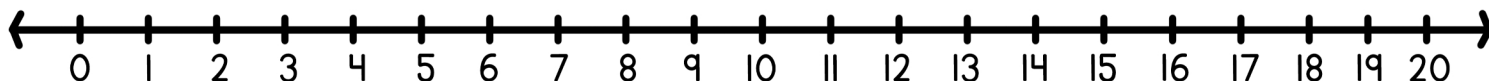
Frank picked 19 apples but he dropped 8 of them had worms. How many good apples did Frank pick?

$$\square - \square = \square$$



Olivia had 12 cupcakes, but she ate 3. How many cupcakes does Olivia have now?

$$\square - \square = \square$$



Zoe had 20 stickers, but she lost 2. How many stickers does Zoe have left?

$$\square - \square = \square$$