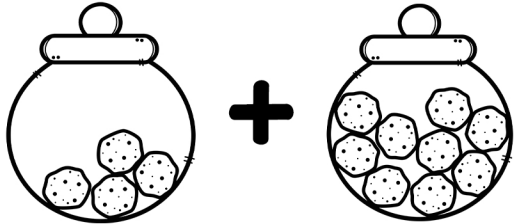




Fill in the blanks with the number from the second box. Solve the problem, then write the answer on the second line.



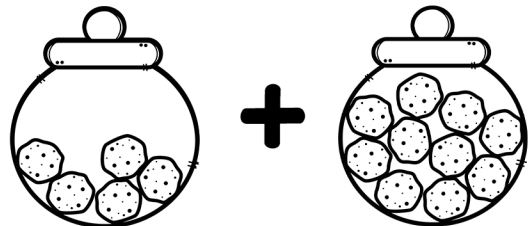
$$4 + \underline{\quad} = \underline{\quad}$$




$$2 + \underline{\quad} = \underline{\quad}$$



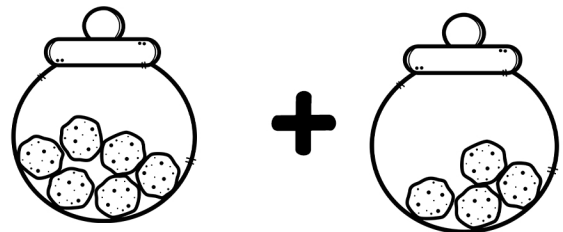
$$7 + \underline{\quad} = \underline{\quad}$$




$$5 + \underline{\quad} = \underline{\quad}$$




$$8 + \underline{\quad} = \underline{\quad}$$



$$6 + \underline{\quad} = \underline{\quad}$$



$$10 + \underline{\quad} = \underline{\quad}$$



$$3 + \underline{\quad} = \underline{\quad}$$