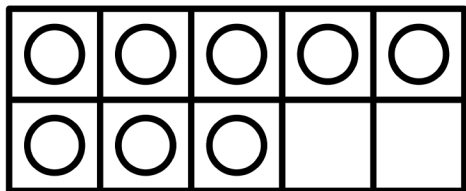
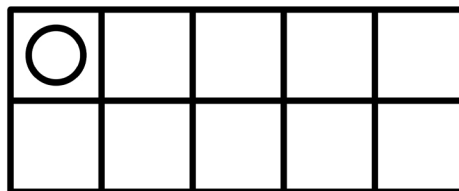


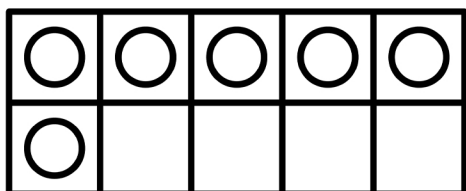
Fill in the missing boxes to complete the ten frame. Finish the equation.



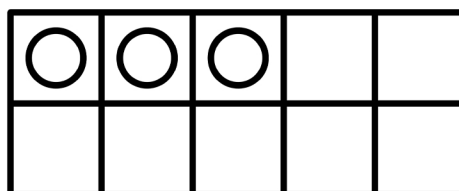
$$8 + \underline{\quad\quad} = 10$$



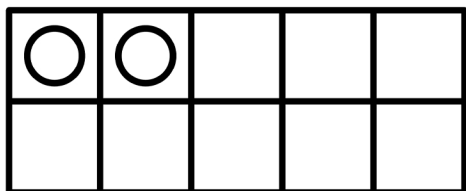
$$1 + \underline{\quad\quad} = 10$$



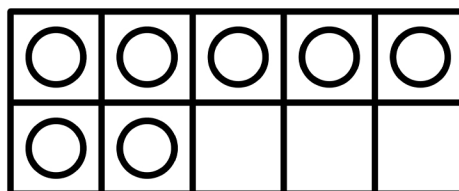
$$6 + \underline{\quad\quad} = 10$$



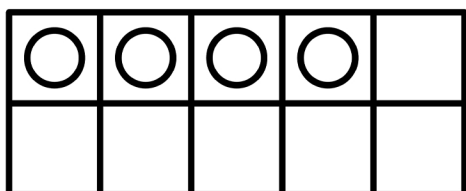
$$3 + \underline{\quad\quad} = 10$$



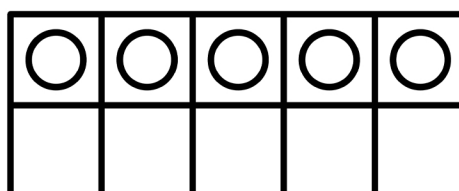
$$2 + \underline{\quad\quad} = 10$$



$$7 + \underline{\quad\quad} = 10$$



$$4 + \underline{\quad\quad} = 10$$



$$5 + \underline{\quad\quad} = 10$$